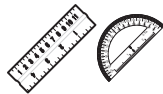


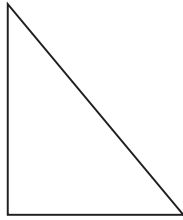
Test 8—Question 3: Geometry

3

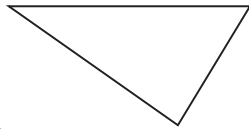


Use your ruler and protractor to solve this problem.

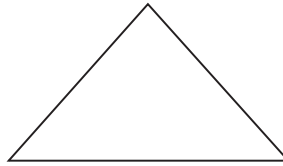
Look at the triangles below.



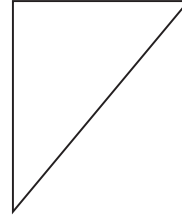
A



B



C



D

Which two triangles are congruent?

Answer _____

On the lines below, explain how you used both your ruler and protractor to determine which two triangles are congruent.
